

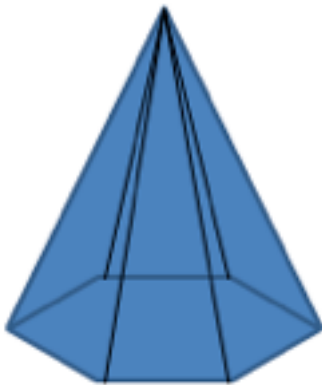
1



4



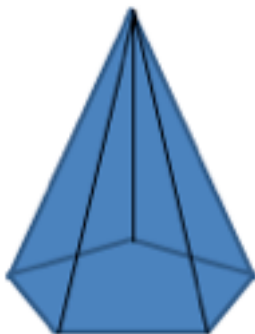
2



5



3



6



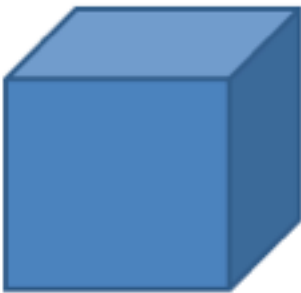
7



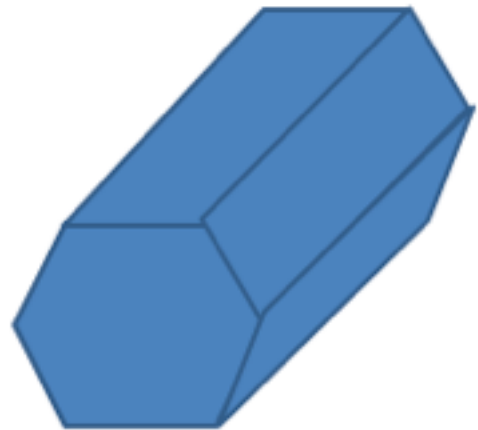
10



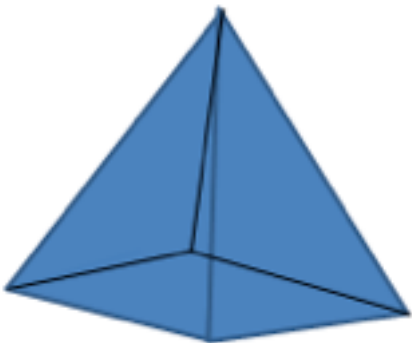
8



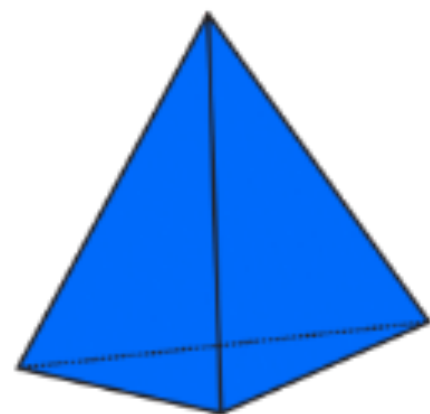
11



9



12



Answers

Prisms				Pyramids			
Name	Faces	Edges	Vertices	Name	Faces	Edges	Vertices
4. Triangular Prism	5	9	6	1. Cone	2	1	1
5. Trapezoidal prism	6	12	8	2. Hexagonal based pyramid	7	12	7
6. Triangular Prism	5	9	6	3. Pentagonal based pyramid	6	10	6
7. Cylinder	3	2	0	9. Squared based pyramid	5	8	5
8. Cube	6	12	8	12. Triangular based pyramid	4	6	4
10. Cuboid (Rectangular Prism)	6	12	8				
11. Hexagonal Prism	8	18	12				